

Name \_\_\_\_\_

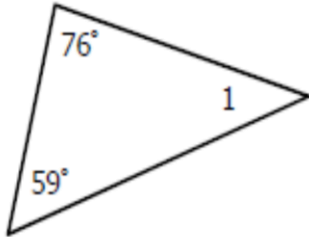
Chapter 3

Date \_\_\_\_\_ Period \_\_\_\_\_

3.5 Homework

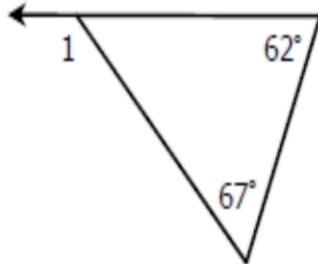
**Directions:** Find all missing angles.

1.



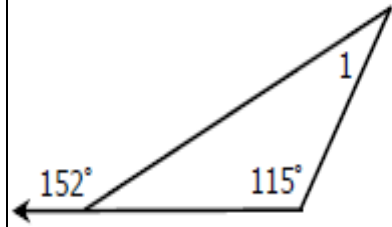
$$m\angle 1 = \underline{\hspace{2cm}}$$

2.



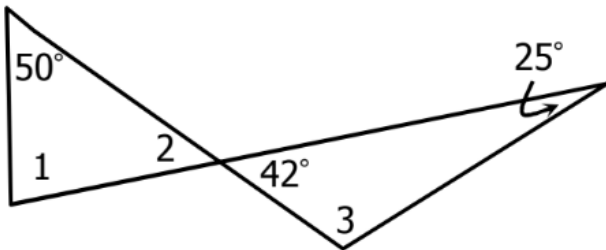
$$m\angle 1 = \underline{\hspace{2cm}}$$

3.



$$m\angle 1 = \underline{\hspace{2cm}}$$

4.

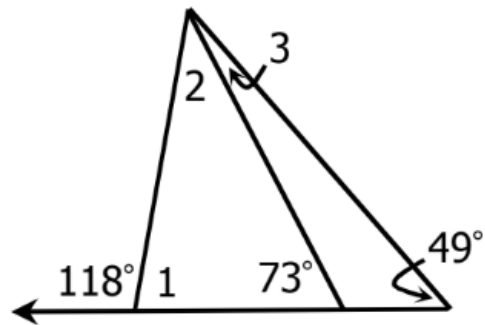


$$m\angle 1 = \underline{\hspace{2cm}}$$

$$m\angle 2 = \underline{\hspace{2cm}}$$

$$m\angle 3 = \underline{\hspace{2cm}}$$

5.



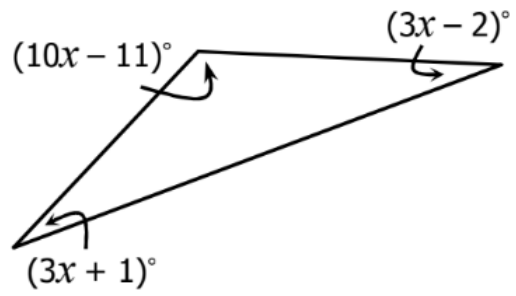
$$m\angle 1 = \underline{\hspace{2cm}}$$

$$m\angle 2 = \underline{\hspace{2cm}}$$

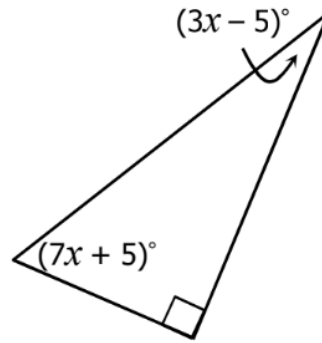
$$m\angle 3 = \underline{\hspace{2cm}}$$

**Directions:** Find the value of  $x$ .

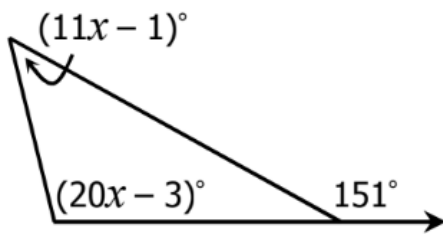
6.



7.



8.



9.

